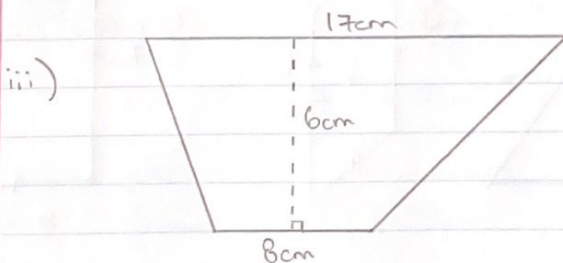
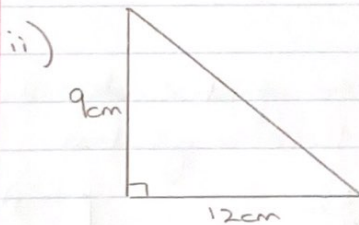



#2

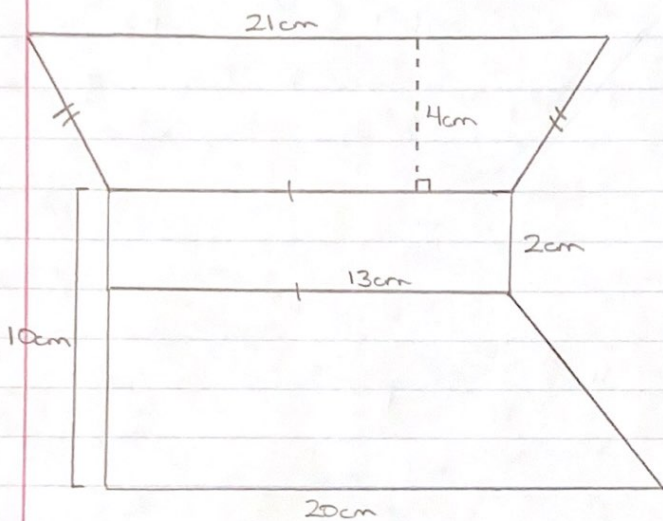
## Extra Practice Worksheet (Area & Perimeter)

1) Some oil spilled on the ground during the loading of an oil truck. The clean-up crew marked off a triangular section on the ground that contained the spill. The base of the triangular section is 12m & the height is 5m. What area on the ground was covered by the spill?

2) Find the area of the following shapes.



3) Find the area of this irregular shape.



4) Order the following shapes from least to greatest depending on their area? What is the order from least to greatest if we use perimeter instead?

